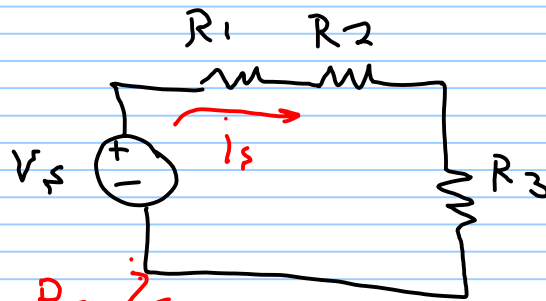


→ Resistors in series:-

KVL

$$-V_s + R_1 i_s + R_2 i_s + R_3 i_s = 0$$

$$V_s = (R_1 + R_2 + R_3) i_s \quad \left. \vphantom{V_s} \right\} V_s = R_{eq} i_s$$

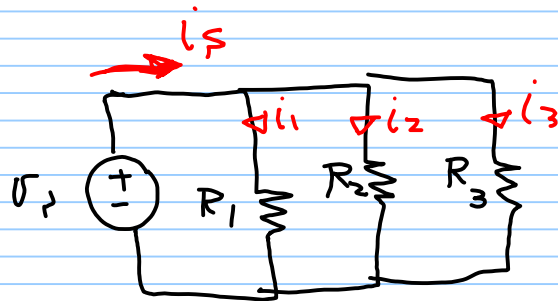


↳  $R_{eq} = R_1 + R_2 + R_3$

↳ series elements have the same current.

→ Resistors in Parallel:-

↳ parallel elements have the same voltage




$$i_1 = \frac{V_s}{R_1}, \quad i_2 = \frac{V_s}{R_2}, \quad i_3 = \frac{V_s}{R_3}$$

→  $i_s = i_1 + i_2 + i_3$

$$i_s = V_s \left( \frac{1}{R_1} + \frac{1}{R_2} + \frac{1}{R_3} \right)$$

$$\therefore \frac{1}{R_{eq}} = \frac{1}{R_1} + \frac{1}{R_2} + \frac{1}{R_3}$$

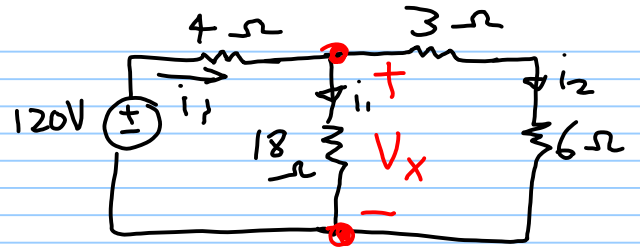
$$\frac{1}{R_{eq}} = \sum_{i=1}^n \frac{1}{R_i}$$



$$R_{eq} = \frac{R_1 R_2}{R_1 + R_2}$$

EX)

find  $i_1, i_2, i_3$



$$R_{eq} = \left[ (3+6) \parallel 18 \right] + 4$$

$$= 10 \Omega$$

$$\text{or } i_1 = \frac{V_f}{R_{eq}} = \frac{120}{10} = \underline{12A} \quad \text{--- (1)}$$

$$\left. \begin{aligned} i_1 &= \frac{9}{9+18} * 12 \\ i_2 &= \frac{18}{18+9} * 12 \end{aligned} \right\}$$

CDR

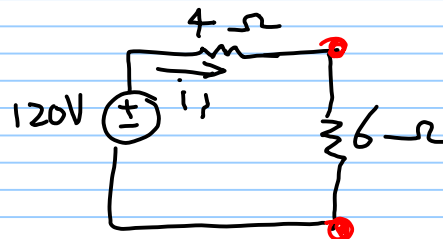
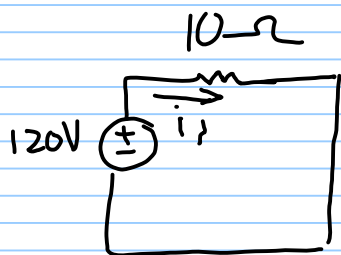
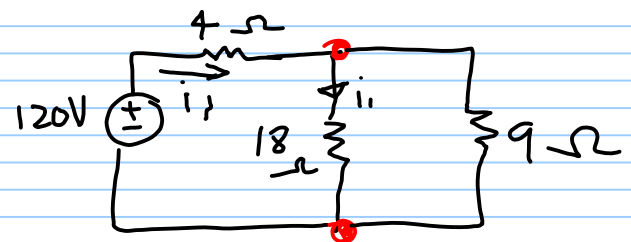
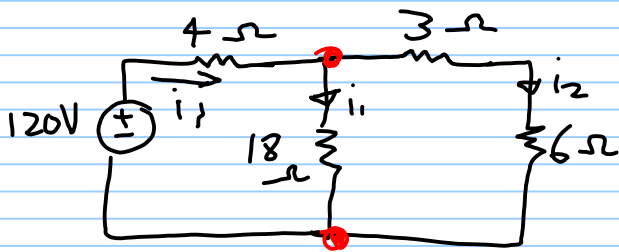
$$\rightarrow -120 + 4 \times 12 + V_x = 0 \quad (\text{KVL})$$

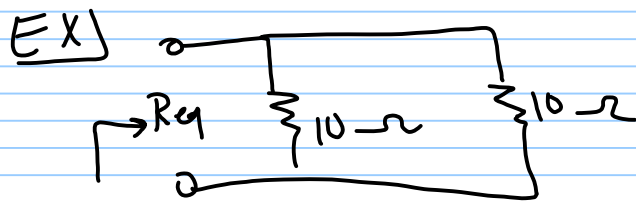
$$V_x = 72V$$

$$\therefore i_1 = \frac{V_x}{18} = \frac{72}{18} = 4A$$

$$\text{or } i_2 = i_1 - i_1 = 12 - 4 = 8A \quad \left. \vphantom{i_2} \right\}$$

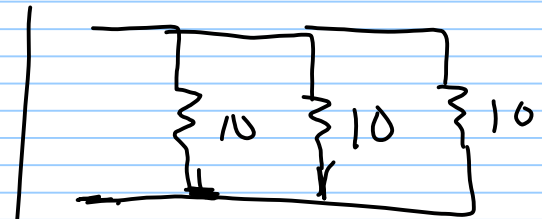
$$\text{OR } i_2 = \frac{V_x}{3+6} = \frac{72}{9} = 8A$$





$$R_{eq} = \frac{10 \times 10}{10 + 10} = 5$$

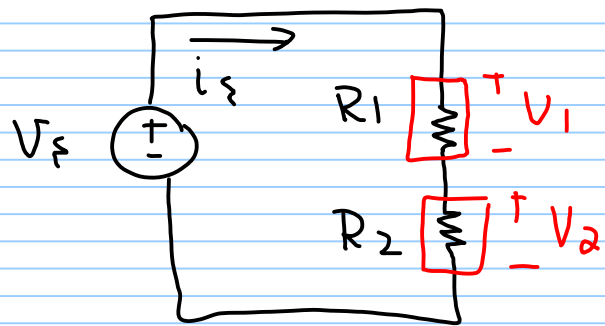
$$= \frac{10}{2}$$



$$R_{eq} = \frac{10}{3}$$

## The Voltage Divider Rule VDR

applied when the voltage is divided between series elements.



$$i_s = \frac{V_s}{R_1 + R_2}$$

$$V_1 = i_s R_1$$

$$V_1 = \frac{R_1}{R_1 + R_2} V_s$$

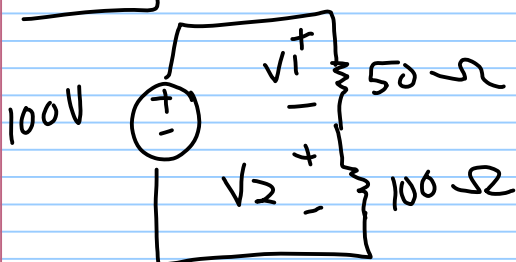
$$V_1 = \frac{R_1}{R_{eq}} V_s$$

$$V_2 = i_s R_2$$

$$V_2 = \frac{R_2}{R_2 + R_1} V_s$$

$$V_2 = \frac{R_2}{R_{eq}} V_s$$

EX)

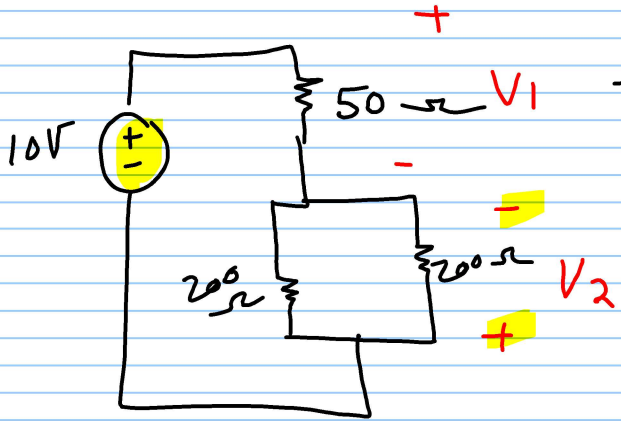


$$V_1 = \frac{50}{50 + 100} \times 100 = 33.33 \text{ V}$$

$$V_2 = \frac{100}{100 + 50} \times 100 = 66.66 \text{ V}$$

$$= 2 \times V_1$$

EX1

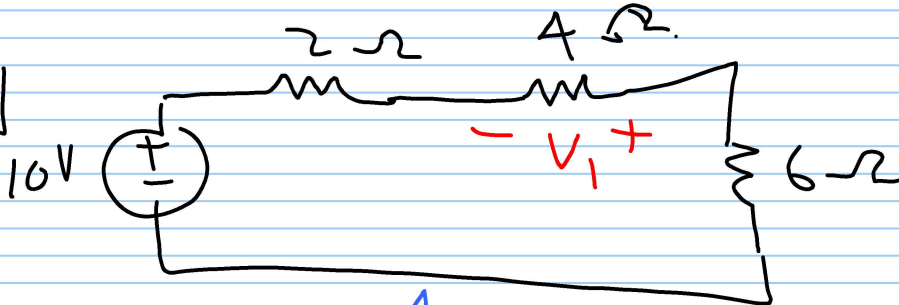


find  $V_1$

$$V_1 = \frac{50}{50 + \frac{200}{2}} * 10$$

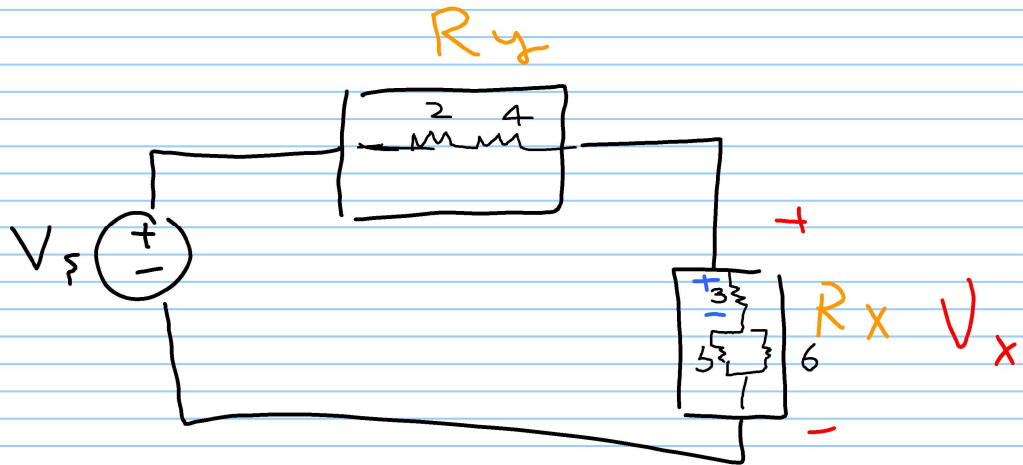
$$V_2 = \frac{-(200/2)}{(200/2) + 50} * 10$$

EX



find  $V_1$

$$V_1 = \frac{4}{4 + (2+6)} * 10$$



$$\textcircled{1} V_x = \frac{R_x}{R_x + R_y} V_S \quad R_x = [3 + (6//5)]$$

$$R_y = (2 + 4)$$

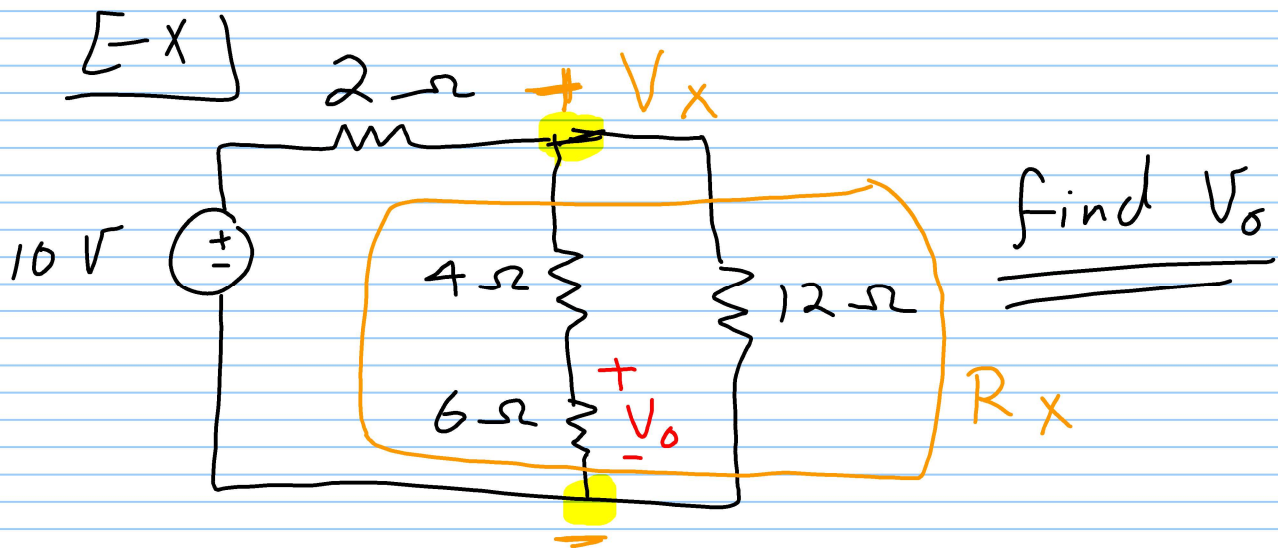
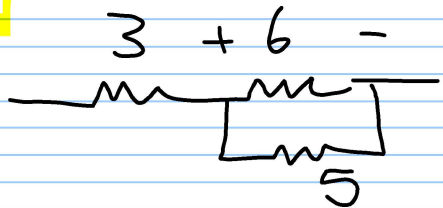
$$\textcircled{2} \text{ find } V_{3\Omega} \quad V_{3\Omega} = \frac{3}{3 + [2 + 4 + \frac{30}{11}]} V_S$$

OR

$$V_{3\Omega} = \frac{3}{3 + [6//5]} \boxed{V_X}$$

& find  $V_{6\Omega}$

$$V_{6\Omega} = \frac{[6//5]}{[6//5] + 3} * V_X$$



$$V_X = \frac{R_X}{R_X + 2} \times 10, \text{ then}$$

$$V_0 = \frac{6}{6 + 4} * V_X$$

$$R_X = 10 // 12 \\ = 5.45 \Omega$$

$$\Rightarrow V_0 = \frac{6}{6 + 4} \left( \frac{R_X}{R_X + 2} \right) \times 10$$

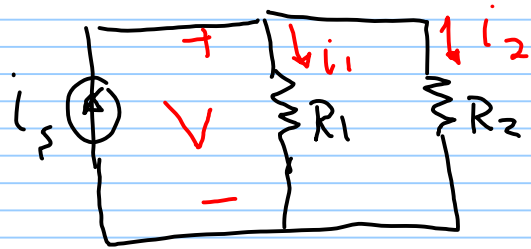
$$= \left( \frac{6}{10} \right) \left( \frac{5.45}{7.45} \right) * 10 \checkmark = 4.389 \text{ V}$$

# The current Divider Rule

## CDR

$$V = i_1 R_1 = i_2 R_2$$

$$= i_s \times \frac{R_1 R_2}{R_1 + R_2}$$



$$\therefore i_1 = \frac{R_2}{R_1 + R_2} i_s \quad \text{OR}$$

$$= \frac{R_2}{R_1 + R_2} i_s$$

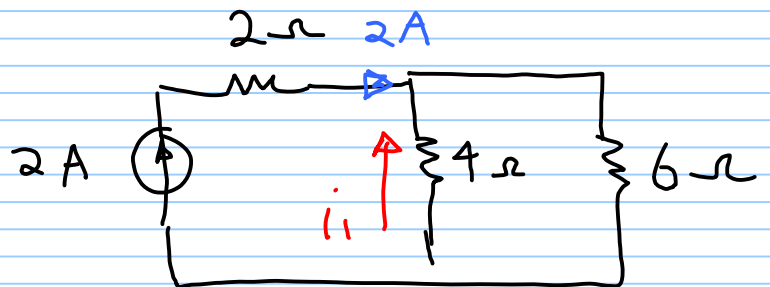
$$i_2 = \frac{R_1}{R_1 + R_2} i_s \quad \text{OR}$$

$$= \frac{R_1}{R_1 + R_2} i_s$$

EX find  $i_1$

$$i_1 = -\frac{6}{6+4} \times 2$$

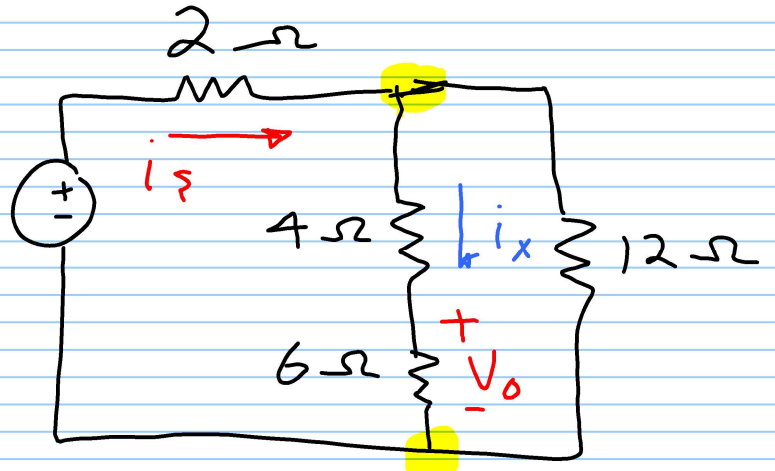
$$= -1.2 \text{ A}$$



[X]

find  $V_0$

10V



① find  $i_s$

$$R_{eq} = 2 + [10 // 12] \\ = 2 + 5.45 \\ = 7.45 \Omega$$

$$\therefore i_s = \frac{10}{R_{eq}} = \frac{10}{7.45} = \underline{\underline{1.34 A}}$$

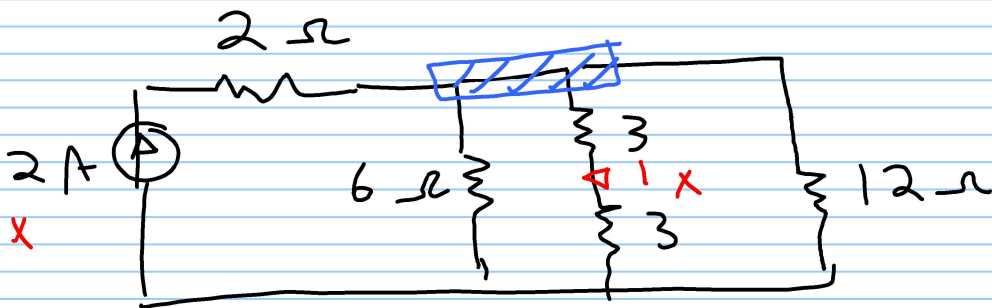
② find  $i_x$

$$i_x = \frac{12}{12 + (4 + 6)} \times (1.34) = 0.73 A$$

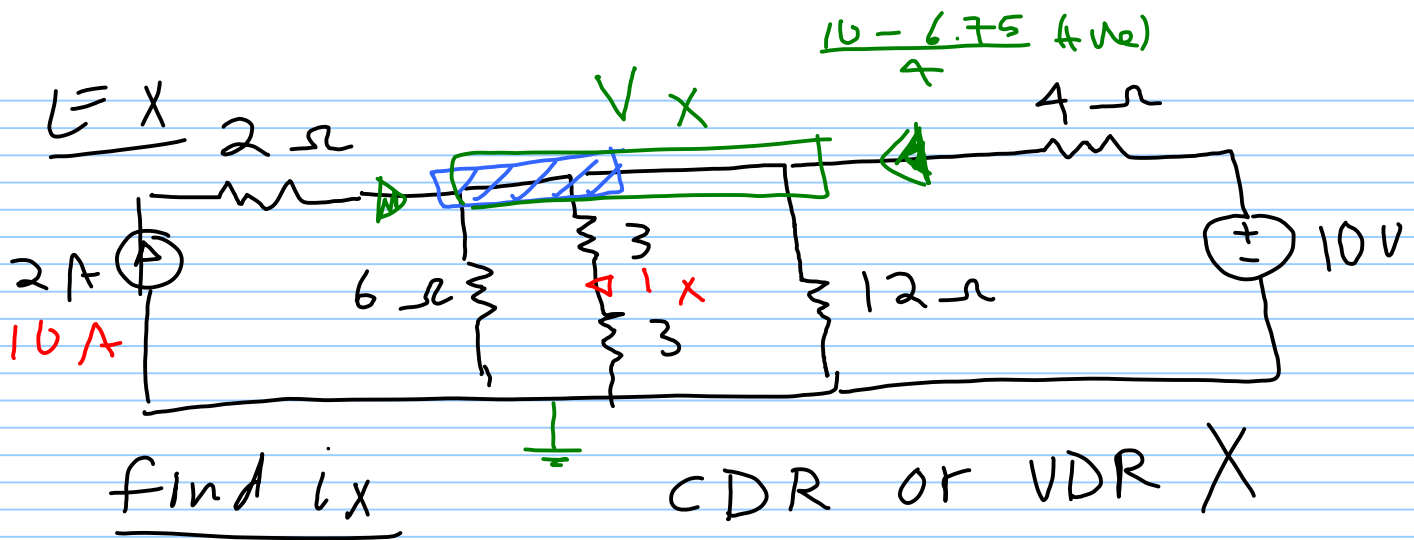
$$\therefore V_0 = (6 \Omega)(0.73 A) \\ = 4.38 \text{ Volt.}$$

[X]

find  $i_x$



$$i_x = \frac{[6 // 12]}{[6 // 12] + [3 + 3]} \times 2 \text{ A}$$



use KVL & KCL

Ch 4

$$-2 + \frac{V_x}{6} + \frac{V_x}{3+3} + \frac{V_x}{12} + \frac{V_x - 10}{4} = 0$$

$$V_x = \text{--- Volt}$$

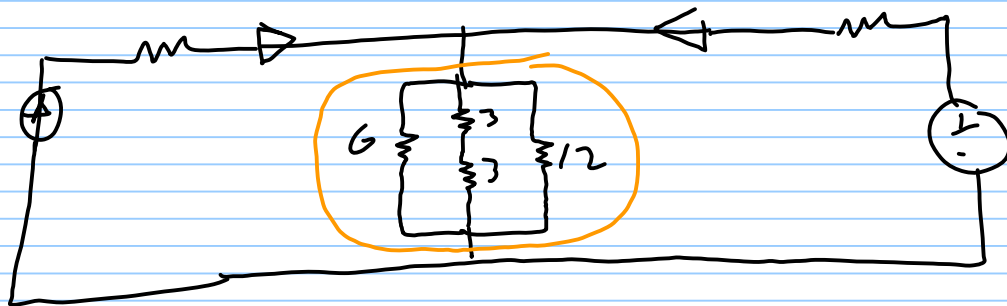
$$\therefore i_x = \frac{V_x}{3+3} \text{ A}$$

$$V_x \left( \frac{1}{6} + \frac{1}{6} + \frac{1}{12} + \frac{1}{4} \right) = 2 + \frac{10}{4}$$

$$V_x \left( \frac{2}{3} \right) = 4.5$$

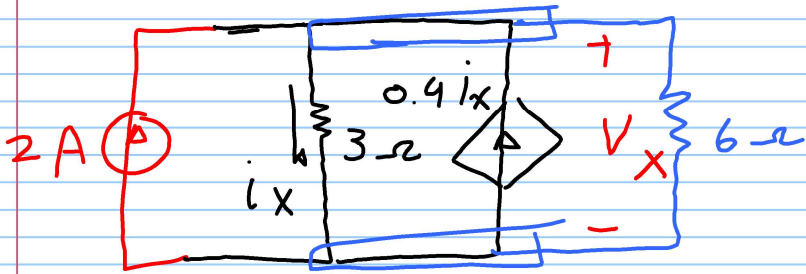
$$V_x = 6.75 \text{ Volt}$$

when using  
(10A)  
 $V_x = 18.75$





Find the power supplied by the  $0.9 i_x$  source?



$$R_{eq}^* = 9 \parallel [15 + 3]$$

$$= 9 \parallel 18$$

$$= 6 \Omega$$

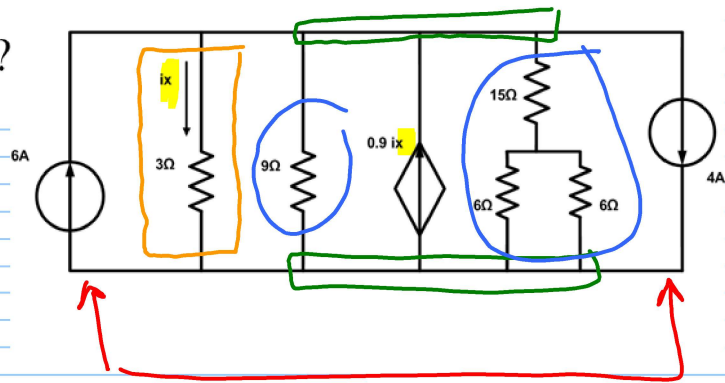
**CDR**

$$i_x = \frac{6}{6+3} [2 + 0.9 i_x]$$

$$i_x = \frac{12 + 5.4 i_x}{9}$$

$$\{ 9 i_x = 12 + 5.4 i_x \}$$

$$\therefore i_x = \frac{12}{9 - 5.4} = 3.33 \text{ A}$$



$$\therefore V_x = (3 \Omega)(3.33)$$

$$\approx 10 \text{ Volt}$$

$$P_{0.9 i_x} = -(0.9 i_x)(V_x)$$

$$= -30 \text{ W}$$

**Bridge Circuits**

One type of resistive circuit that cannot be simplified through series and/or parallel combinations is the “bridge circuit.” A bridge circuit is shown below (drawn twice). Study the circuit to verify that there are no series resistors and no parallel resistors.

